




Name:

Weekly Math Review - Q3:2

Date:

Monday	Tuesday	Wednesday	Thursday
How many tens are there in 800?	410 is the same as ____ ones ____ tens ____ hundreds	Write the number. <div style="border: 1px solid black; width: 100px; height: 30px; display: inline-block;"></div> 18 ones 9 tens 2 hundreds	What is the largest number you can make with 8, 9, and 6?
Count forward by fives. 35, _____, _____, _____	Count forward by tens. 190, _____, _____, _____	Count forward by hundreds. 650, _____, _____, _____	Count forward by fives. 741, _____, _____, _____
Write the number in <b>standard form</b> . <div style="border: 1px solid black; width: 100px; height: 30px; display: inline-block;"></div> $100 + 80 + 7$	Write the number 438 in <b>word form</b> . _____ _____	Write six hundred seven in <b>standard form</b> .	Write 289 in <b>expanded form</b> .
Compare the numbers using $> < =$ $745 \bigcirc 739$	Order the numbers from greatest to least. 384    284    584	Compare the numbers using $> < =$ $119 \bigcirc 109$	Order the numbers from least to greatest. 938    945    903
Solve. $7 + 11 =$ $17 - 3 =$ $9 - 5 =$ $11 + 8 =$ $12 + 5 =$ $19 - 7 =$	Solve. $5 + 8 =$ $6 + 6 =$ $5 + 9 =$ $5 + 3 =$ $0 + 7 =$ $1 + 4 =$	Solve. $15 + 3 =$ $15 - 13 =$ $17 - 8 =$ $14 + 4 =$ $9 + 11 =$ $18 - 18 =$	Solve. $9 + 7 =$ $6 + 7 =$ $3 + 4 =$ $7 + 5 =$ $4 + 8 =$ $8 + 3 =$
Use a strategy to find the sum of $77 + 15$ .	Use a strategy to find the sum of $64 + 31$ .	Use a strategy to find the sum of $28 + 49$ .	Use a strategy to find the sum of $33 + 25$ .
Use a strategy to find the difference of $75 - 37$ .	Use a strategy to find the difference of $45 - 32$ .	Use a strategy to find the difference of $66 - 48$ .	Use a strategy to find the difference of $89 - 65$ .
There are 27 birds in a tree. 38 more birds join them. Suddenly, 20 birds fly away. How many birds are there now?	The zoo has 75 pounds of meat for the tigers. They feed the tigers 14 pounds of the meat. How many pounds of meat do the tigers have left?	Chris has 85 marbles in a bag. He gives 23 to his sister, and 17 to his brother. How many marbles does he have left?	There are 47 pages in Walter's book. He reads 29 pages. How many more pages are left to read?
What time is it? <div style="border: 1px solid black; width: 100px; height: 30px; display: inline-block;"></div> 	What time is it? <div style="border: 1px solid black; width: 100px; height: 30px; display: inline-block;"></div> 	What time is it? <div style="border: 1px solid black; width: 100px; height: 30px; display: inline-block;"></div> 	What time is it? <div style="border: 1px solid black; width: 100px; height: 30px; display: inline-block;"></div> 